

$$15 \div \square = 5$$

$$18 \div 2 = \square$$

$$\square \div 6 = 3$$

$$\square \div 1 = 10$$

$$16 \div 8 = \square$$

$$14 \div \square = 7$$

$$\square \div 5 = 2$$




$$12 \div \square = 4$$

$$18 \div \square = 9$$

$$15 \div 5 = \square$$

$$\square \div 4 = 5$$

$$12 \div 2 = \square$$



20

$$15 \div 3 = 5$$

$$18 \div 2 = 9$$

$$18 \div 6 = 3$$

$$10 \div 1 = 10$$

$$16 \div 8 = 2$$

$$14 \div 2 = 7$$

$$10 \div 5 = 2$$

$$12 \div 3 = 4$$

$$18 \div 2 = 9$$

$$15 \div 5 = 3$$

$$20 \div 4 = 5$$

$$12 \div 2 = 6$$