

$$4 \div \square = 2$$

$$7 \div 1 = \square$$

$$\square \div 3 = 3$$

$$\square \div 1 = 10$$

$$10 \div 2 = \square$$

$$6 \div \square = 3$$

$$\square \div 3 = 2$$




$$8 \div \square = 2$$

$$3 \div \square = 1$$

$$2 \div 2 = \square$$

$$\square \div 2 = 4$$

$$5 \div 5 = \square$$



10

$$4 \div 2 = 2$$

$$7 \div 1 = 7$$

$$9 \div 3 = 3$$

$$10 \div 1 = 10$$

$$10 \div 2 = 5$$

$$6 \div 2 = 3$$

$$6 \div 3 = 2$$

$$8 \div 4 = 2$$

$$3 \div 3 = 1$$

$$2 \div 2 = 1$$

$$8 \div 2 = 4$$

$$5 \div 5 = 1$$